



Use the numberlines to round each number to the nearest 100.

Answers

Ex)

1,748



Ex. 1,700

1)

7,822



1. _____

2)

171



2. _____

3)

48,746



3. _____

4)

980



4. _____

5)

41,204



5. _____

6)

1,043



6. _____

7)

13,960



7. _____

8)

20,294



8. _____

9)

425



9. _____

10)

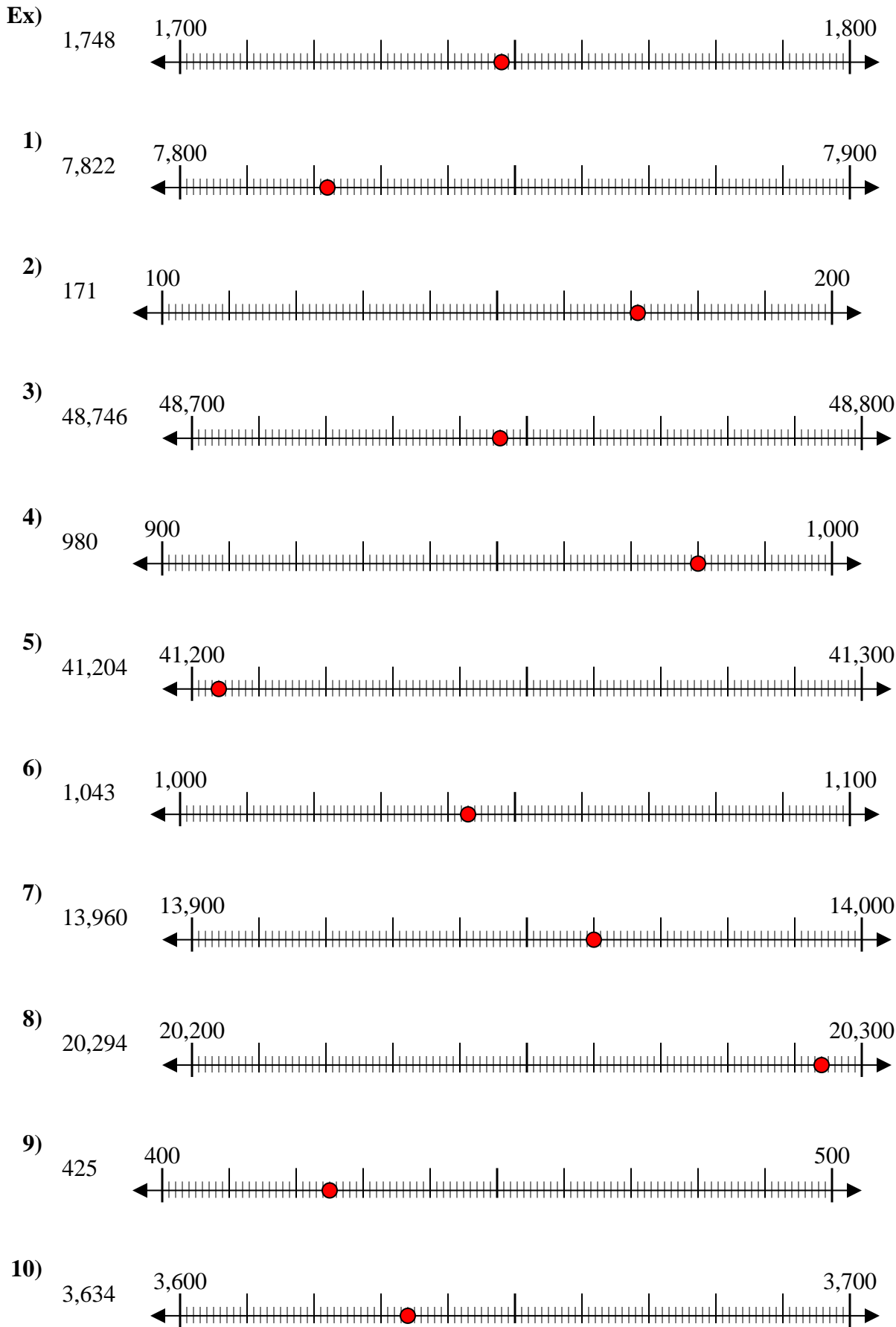
3,634



10. _____



Use the numberlines to round each number to the nearest 100.



Answers

- Ex. 1,700
1. 7,800
2. 200
3. 48,700
4. 1,000
5. 41,200
6. 1,000
7. 14,000
8. 20,300
9. 400
10. 3,600



Use the numberlines to round each number to the nearest 100.

Ex)

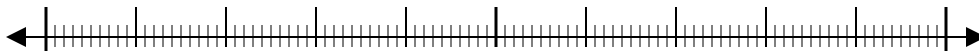
1,748



Ex. 1,700

1)

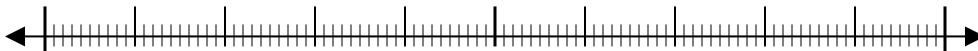
7,822



1. _____

2)

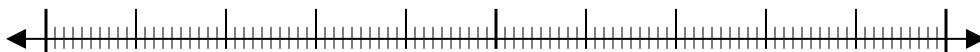
171



2. _____

3)

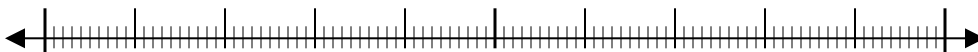
48,746



3. _____

4)

980



4. _____

5)

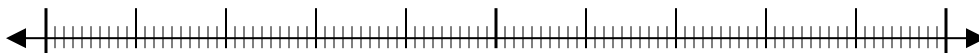
41,204



5. _____

6)

1,043



6. _____

7)

13,960



7. _____

8)

20,294



8. _____

9)

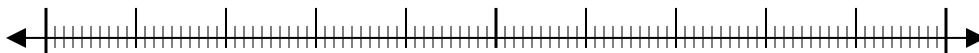
425



9. _____

10)

3,634



10. _____

Answers